

DICE GAMES



www.lessonplandiva.com

More and Less

Roll one die and write the number in the middle box. Fill in the numbers for 10 more, 10 less, 1 more, and 1 less.

Fact Families

Roll the dice and write in the 2 numbers. Add to calculate the 3rd number.
Write the complete fact family.

--	--

	+		=	
	+		=	
	-		=	
	-		=	

--	--

	+		=	
	+		=	
	-		=	
	-		=	

--	--

	+		=	
	+		=	
	-		=	
	-		=	

--	--

	+		=	
	+		=	
	-		=	
	-		=	

--	--

	+		=	
	+		=	
	-		=	
	-		=	

--	--

	+		=	
	+		=	
	-		=	
	-		=	

--	--

	+		=	
	+		=	
	-		=	
	-		=	

--	--

	+		=	
	+		=	
	-		=	
	-		=	

--	--

	+		=	
	+		=	
	-		=	
	-		=	

Subtraction

Roll the dice and write in the the largest number first. Write the correct difference in the box.

\square	\square	\square	\square
\square	\square	\square	\square
\square	\square	\square	\square
\square	\square	\square	\square
\square	\square	\square	\square
\square	\square	\square	\square
\square	\square	\square	\square
\square	\square	\square	\square
\square	\square	\square	\square
\square	\square	\square	\square

Addition

Roll the dice and write in the the 2 numbers. Write the correct sum.

$$\begin{array}{r} \square \\ + \square \\ \hline \end{array}$$

$$\begin{array}{r} \square \\ + \square \\ \hline \end{array}$$

$$\begin{array}{r} \square \\ + \square \\ \hline \end{array}$$



$$\begin{array}{r} \square \\ + \square \\ \hline \end{array}$$

$$\begin{array}{r} \square \\ + \square \\ \hline \end{array}$$

$$\begin{array}{r} \square \\ + \square \\ \hline \end{array}$$

$$\begin{array}{r} \square \\ + \square \\ \hline \end{array}$$


$$\begin{array}{r} \square \\ + \square \\ \hline \end{array}$$



Greater Than or Less Than

Roll the dice and write in the the 2 numbers. Write in the correct sign
in the circle. < > or =

	○	
--	---	--




	○	
--	---	--

	○	
--	---	--

	○	
--	---	--

	○	
--	---	--




	○	
--	---	--

	○	
--	---	--

	○	
--	---	--

	○	
--	---	--




	○	
--	---	--

	○	
--	---	--

	○	
--	---	--

	○	
--	---	--



	○	
--	---	--

	○	
--	---	--

	○	
--	---	--